



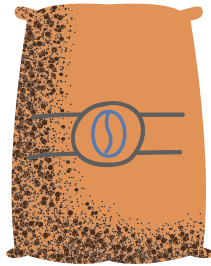

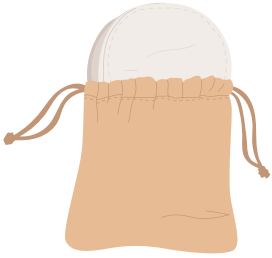
Name: _____

Date: _____

COUNTING

AN ADDITION GAME

Directions: Count how many sheep and bags you see.
Write the answers at the box provided below.



SHEEP

BAGS